

# DICE GAMES



[www.lessonplandiva.com](http://www.lessonplandiva.com)



# More and Less

Roll one die and write the number in the middle box. Fill in the numbers for 10 more, 10 less, 1 more, and 1 less.










# Fact Families

Roll the dice and write in the 2 numbers. Add to calculate the 3rd number.  
Write the complete fact family.

--	--

$$\begin{array}{r} \_ + \_ = \_ \\ \_ + \_ = \_ \\ \_ - \_ = \_ \\ \_ - \_ = \_ \end{array}$$

--	--

$$\begin{array}{r} \_ + \_ = \_ \\ \_ + \_ = \_ \\ \_ - \_ = \_ \\ \_ - \_ = \_ \end{array}$$

--	--

$$\begin{array}{r} \_ + \_ = \_ \\ \_ + \_ = \_ \\ \_ - \_ = \_ \\ \_ - \_ = \_ \end{array}$$

--	--

$$\begin{array}{r} \_ + \_ = \_ \\ \_ + \_ = \_ \\ \_ - \_ = \_ \\ \_ - \_ = \_ \end{array}$$

--	--

$$\begin{array}{r} \_ + \_ = \_ \\ \_ + \_ = \_ \\ \_ - \_ = \_ \\ \_ - \_ = \_ \end{array}$$

--	--

$$\begin{array}{r} \_ + \_ = \_ \\ \_ + \_ = \_ \\ \_ - \_ = \_ \\ \_ - \_ = \_ \end{array}$$

--	--

$$\begin{array}{r} \_ + \_ = \_ \\ \_ + \_ = \_ \\ \_ - \_ = \_ \\ \_ - \_ = \_ \end{array}$$

--	--

$$\begin{array}{r} \_ + \_ = \_ \\ \_ + \_ = \_ \\ \_ - \_ = \_ \\ \_ - \_ = \_ \end{array}$$

--	--

$$\begin{array}{r} \_ + \_ = \_ \\ \_ + \_ = \_ \\ \_ - \_ = \_ \\ \_ - \_ = \_ \end{array}$$

# Subtraction



Roll the dice and write in the the largest number first. Write the correct difference in the box.

$\square$	$\square$	$\square$	$\square$
$\square$	$\square$	$\square$	$\square$
—	—	—	—
$\square$	$\square$	$\square$	$\square$
$\square$	$\square$	$\square$	$\square$
—	—	—	—
$\square$	$\square$	$\square$	$\square$
$\square$	$\square$	$\square$	$\square$
—	—	—	—
$\square$	$\square$	$\square$	$\square$

# Addition

Roll the dice and write in the the 2 numbers. Write the correct sum.


$\square$	$\square$	$\square$	$\square$
$+$	$+$	$+$	$+$
$\square$	$\square$	$\square$	$\square$
<hr/>			
$\square$	$\square$	$\square$	$\square$
$\square$	$\square$	$\square$	$\square$
$+$	$+$	$+$	$+$
$\square$	$\square$	$\square$	$\square$
<hr/>			
$\square$	$\square$	$\square$	$\square$



# Greater Than or Less Than

Roll the dice and write in the the 2 numbers. Write in the correct sign  
in the circle.  $<$   $>$  or  $=$

	○	
--	---	--



	○	
--	---	--

	○	
--	---	--

	○	
--	---	--

	○	
--	---	--




	○	
--	---	--

	○	
--	---	--

	○	
--	---	--

	○	
--	---	--




	○	
--	---	--

	○	
--	---	--

	○	
--	---	--

	○	
--	---	--



	○	
--	---	--

	○	
--	---	--

	○	
--	---	--